


3rd H O M E W O R K

NAME: _____

Directions:

Choose an option to complete each night during the week. Be sure to complete the **MUST DO** activities by the due date. Attach the work when you've completed the activity.

Homework Due: Friday, April 15th



Math:

Must Do:

- Spring Task Cards
- Math Review 1
- Math Review 2

May Do:

- Multiplication and division fact practice

Spelling:

1. singer
2. loudly
3. joyful
4. teacher
5. fighter
6. closely
7. powerful
8. farmer
9. quickly
10. careful
11. friendly
12. speaker
13. wonderful
14. truly

Review

- hurried
- cities
- stories
- carried

Challenge

- watchful
- delightful
- steadily
- container

Reading:

Must Do:


- "Egg"cellent Traditions
- One April Writing Calendar Choice
- Practice Spelling
- Read 20 minutes per night

May Do:

- Word Choice
- Additional writing calendar choices

1

Amy went to Florida on Spring Break. It will take 8 hours to get home. If she left at 6am, what time will she get home?



2

The Scott family drove 236 miles on Friday, 311 miles on Saturday. If their trip will be 902 miles total, how many miles will they drive on Sunday?



1. _____

2. _____


3

Sam stayed home for spring break. He read 6 chapters of his book on Monday, 5 chapters of his book on Tuesday and 3 chapters on Wednesday. If his book has 20 chapters, how many does he have left to read?



4

Ashley spent one day of spring break making cookies with her grandmother. They made 3 dozen peanut butter, 2 dozen chocolate chip and 3 dozen sugar cookies. If her family eats 8 cookies, how many did she have left?



3. _____

4. _____

5

Sarah and her family are going to Disney. Adults cost \$105 dollars and kids are \$99 a day for tickets. If her family has 2 adults and 2 kids, how much will it cost them to go to Disney?



6

Evan slept in on Spring break. Usually, he wakes up at 7:00am but today he woke up at 8:35. How many minutes did he sleep?



5. _____

6. _____

7

Mrs. Thomas gave her students homework over Spring Break. Jamie worked 2 hours on Monday, 1 hour on Thursday and 30 minutes on Saturday. How many total minutes did he work on homework during Spring Break?



8

Three friends had a pizza party during Spring Break. Ethan ate $\frac{4}{6}$ of his pizza. Rashad ate $\frac{2}{3}$ of his pizza. Abby ate $\frac{2}{5}$ of her pizza. Who ate the same amount of pizza?



7. _____

8. _____

Math Review 1

Name _____

Day

1

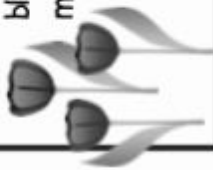
1. $2 \times 5 \times 5 = 10 \times 3$

True

False

4. Longwood Gardens planted 350 tulip bulbs last fall. 278 of the tulips bloomed this spring. How many tulips did not bloom?

_____ tulips



2. How many minutes are in $\frac{1}{4}$ of an hour? Draw a clock.


_____ minutes

3. Write a multiplication equation for this array.



_____ x _____ = _____

5. Jennifer folded 3 strips of paper as shown by the dotted lines. If she colors one piece of each strip, what fraction of each does she color?



Fraction:

Score

1. Draw a rhombus.

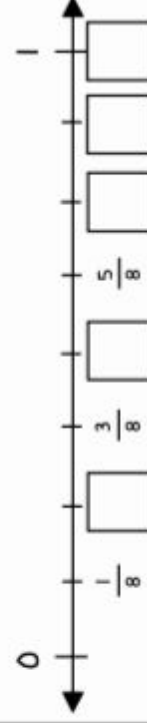
Day



2

2. Use $<$, $>$, or $=$.

$\frac{1}{8}$ ○ $\frac{1}{4}$

3. Fill in the missing fractions on this number line.





4.  Draw & Solve  A butterfly has 4 wings. How many wings on 6 butterflies?




Write the equation.

_____ wings

5.  Look at the number line.

 How many eighths are the same as one-half? _____

 How many eighths are the same as 1 whole? _____

Score

work space

Monarch

Butterfly



Life Cycle

This is the story of a beautiful monarch butterfly.

She started as an

1. egg



on a milkweed leaf.

1. April showers bring 73 flowers!
 27 daffodils
 32 pansies
 + tulips

 73 flowers

2. Use <, >, or =.
 $\frac{3}{4}$ ○ $\frac{3}{8}$

3.

X	3	4	5	6
4				
5			25	
6				

Fill in the missing numbers on this multiplication chart.

work space

Milkweeds grow in

- Fields
- meadows
- roadsides
- gardens
- *****

?

How did the milkweed get its name?



Day 3

4. Write two things you know about a rhombus.

1. _____
2. _____

5.

Dollar	Quarter	Nickel	Penny
Ty			
Pam			
Marie			

Ty has \$ 5.24
 Pam has \$ 3.27
 Marie has \$ 2.53
 Write numbers in the chart to show each amount.

Score

Day 4

1. $48 = \underline{\quad} \times 8$

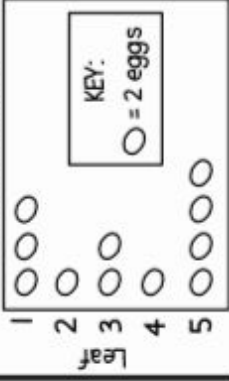


2. Write a division equation that is related to this multiplication example.

$\underline{\quad} \div \underline{\quad} = \underline{\quad}$

3.

Mr. Potter's class counted the monarch eggs on 5 milkweed leaves. How many leaves had less than 6 eggs?



4.

Matthew has 3 boxes of crayons. There are 20 crayons in each box.

How many crayons in all? _____ x _____ = _____

Score

5. On the graph above, how many more eggs were on Leaf 5 than on Leaf 2 and Leaf 3?

_____ eggs

Math Review 2


"EGG"CELLENT TRADITIONS

In the United States, you might participate in an Easter egg hunt on or around Easter. Americans have their own **traditions**, or ways to celebrate, like the Easter Egg Roll that the White House hosts every year. Although Easter egg hunts are fun, there are many other traditions around the globe that you may not know about. Some may sound silly, while others may sound even more fun than scavenger hunts!

Countries in Europe celebrate Easter in a variety of ways. For example, in one French city, Haux, a giant omelet is cooked and served in the town's main square. The omelet is truly enormous – It is made from about 4,500 eggs and feeds over 1,000 people! In Scotland, some fish and chips shops sell deep-fried eggs during the Easter season.

Why eggs? Eggs are thought to represent new life, so Christians believe that Easter eggs symbolize Jesus rising from the dead.

NEW WAYS TO CELEBRATE



In the United States, we decorate eggs as an Easter tradition.

A more recent Easter egg tradition involves beeping eggs. These special eggs make clicking noises and were invented to allow visually impaired children, or kids who can't see well, to hunt for Easter eggs. How cool is that?

People all over the world have many different traditions for the Easter season.

Which is your favorite?

© School and The City 2018





Locate the text features and circle them with the correct colors.
Check each box as you find each text feature.

- | | |
|---|---|
| <input type="checkbox"/> RED: illustration | <input type="checkbox"/> GREEN: heading |
| <input type="checkbox"/> ORANGE: text box | <input type="checkbox"/> BLUE: subheading |
| <input type="checkbox"/> YELLOW: caption | <input type="checkbox"/> PURPLE: bold text |



APRIL Writing Calendar



SUNDAY	MONDAY	TUESDAY	WEDNESDAY	THURSDAY	FRIDAY	SATURDAY
WORD BANK joke prank rain showers thunder puddle umbrella cloud mud Earth Day recycle environment Easter bunny chick egg basket	Write an acrostic poem using the word April. <input type="checkbox"/>	Write about your favorite Spring story. <input type="checkbox"/>	Write about your favorite indoor recess activity. <input type="checkbox"/>	Write about your favorite Spring activity. <input type="checkbox"/>	If you could play a joke on someone, who would it be? Why? <input type="checkbox"/>	
	Write what you know about Arbor Day. <input type="checkbox"/>	Write three questions you have about Arbor Day. <input type="checkbox"/>	Write your own weather report about today's weather. <input type="checkbox"/>	Write down all the words you can think of that begin with A. <input type="checkbox"/>	List all the things you can think of that need rain. <input type="checkbox"/>	
	Look outside the window and describe the weather you see. <input type="checkbox"/>	Write about your favorite book. <input type="checkbox"/>	Use words from the word bank to write a story. <input type="checkbox"/>	Write about a time you were sick. How did you feel? Who took care of you? <input type="checkbox"/>	Write a story about a missing Easter basket. <input type="checkbox"/>	
	If you could meet Justin Bieber, what would you say to him? <input type="checkbox"/>	Think about a time you were hungry, write about it. <input type="checkbox"/>	Write about why trees are important to our environment. <input type="checkbox"/>	Write about why it's important to recycle. <input type="checkbox"/>	Does it feel like Spring to you? Why or why not? <input type="checkbox"/>	
	What do you like most about the month of April? <input type="checkbox"/>	What do you like least about the month of April? <input type="checkbox"/>	Who is your favorite cartoon character? Why? <input type="checkbox"/>	Write a paragraph telling someone how to ride a bike. <input type="checkbox"/>	Write about the best story your teacher has read about this month. <input type="checkbox"/>	
	DIRECTIONS:					
	Free CHOICE					



HAPPY EASTER WORD SEARCH



C	E	Y	O	A	S	B	U	N	N	Y	T
A	L	O	V	E	K	C	Y	I	P	H	P
R	V	J	L	A	G	L	B	P	G	O	D
A	T	N	U	H	I	Y	A	I	J	P	K
M	O	P	E	M	B	H	S	U	N	C	Y
E	K	C	A	N	D	Y	K	U	I	A	D
L	E	F	S	U	N	D	I	H	O	D	S
T	E	E	T	A	L	O	C	O	H	C	G
H	T	E	E	W	S	E	G	P	S	D	G
C	T	A	R	A	P	S	A	E	K	F	E
B	A	S	K	E	T	Y	A	D	N	U	S
H	Y	T	O	C	O	H	A	F	D	N	O

Word List

- Easter
- Happy
- Chocolate
- Love
- Eggs
- Bunny
- Chick
- Basket
- Family
- Hope
- Joy
- Sunday
- Caramel
- Candy
- Sweet
- Fun
- Hunt
- Hop

