

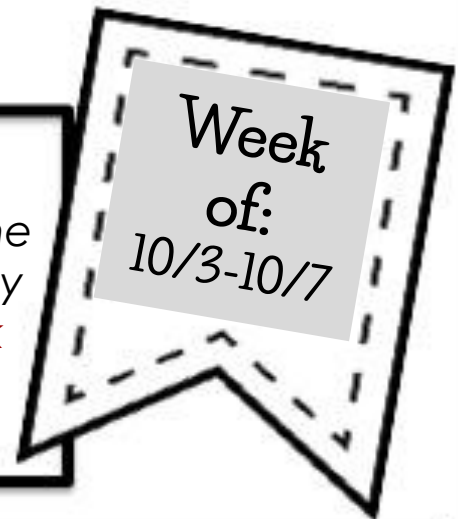
3<sup>rd</sup> H O M E W O R K

NAME: \_\_\_\_\_

Directions:

Choose an option to complete each night during the week. Be sure to complete the **MUST DO** activities by the due date. Check the box and *attach the work when you've completed the activity.*

**Homework Due: Friday, October 7th**



Math:

**Must Do:**

- Addition Mystery Picture

**May Do:**

- Additional place value choice board activities

Spelling:

1. lay
2. real
3. trail
4. sweet
5. today
6. dream
7. sleep
8. tea
9. treat
10. afraid
11. leave
12. bait
13. speed
14. lead

**Review**

- erase
- invite
- excuse
- spoke

**Challenge**

- flavor
- even
- between
- pavement

Reading:

**Must Do:**

- Read 20 minutes each night
- Practice spelling at least 1 time


**May Do:**

- Additional choice board activities

# HOMework MENU

**Directions:** choose an activity from the menu. Once you complete the activity, color in the box and attach the work to the back of the packet. Mrs. Balinbin would love to see your work!

**Challenge:** can you get 3 in a row (a tic-tac-toe or BINGO) with your activities this week?



<p>Create four 3 or 4 digit numbers. Break them apart to find addends.</p> <p>Ex: <math>342 \rightarrow 300 + 40 + 2</math>  <math>\underline{+256 \rightarrow 200 + 50 + 6}</math>  <math>598 \rightarrow 500 + 90 + 8</math></p>	<p>Write an example for each of the Properties of Addition.</p> <p>Commutative:                      Identity:                      Associative:</p>	<p>Make an addition memory game.</p> <p>Write an addition problem on one card. Write the answer on another. Repeat for 4-5 more problems. Place cards upside down and see if you can find the problem + answer match!</p>
<p>Round each number to the nearest 100.</p> <p>1,825                      162,820                      3,529                      98,258                      4,754</p>	<p>Addition Mystery Picture                      (pages attached)</p>	<p>Create a 4 or 5-digit number. Write it in standard form, expanded form, and word form.                      Repeat for 3 more numbers!</p>
<p>Addition Word Problems                      (pages attached)</p>	<p>Look for 2 numbers around your house. Estimate their sum!</p> <p>Repeat 3x.</p>	<p>Create a restaurant menu where the prices are addition problems.</p> <p>Bread = <math>\\$43 + \\$22</math></p>

Name \_\_\_\_\_

Date \_\_\_\_\_

# Addition Word Problems

1. There were 348 buttons in the box and 278 buttons in the jar. How many buttons were there in all?


2. Grace collected 489 cans to recycle. Macie collected 543 cans. How many total cans did they collect?

3. Lucas planted 129 seeds, and Jacob planted 193 seeds. How many total seeds did they plant?

4. There are 152 third graders and 189 fourth graders. How many third and fourth graders are there?

5. Molly has \$284, and her sister has \$197. What is the combined total of their money?

6. Olivia had 389 stickers. She bought 98 more stickers. How many stickers does Olivia have now?



Name \_\_\_\_\_

Date \_\_\_\_\_

# Addition Mystery Picture

Solve the following addition problems. Use your answers to find a mystery picture. Just color the answers on the squares on the attached page.

$25+38=$  \_\_\_\_\_

$31+37=$  \_\_\_\_\_

$28+28=$  \_\_\_\_\_

$42+$  \_\_\_\_\_  $=56$

$39+46=$  \_\_\_\_\_

$15+12=$  \_\_\_\_\_

$36+19=$  \_\_\_\_\_

$28+$  \_\_\_\_\_  $=45$

$18+6=$  \_\_\_\_\_

$48+28=$  \_\_\_\_\_

$29+16=$  \_\_\_\_\_

$39+$  \_\_\_\_\_  $=52$

$39+7=$  \_\_\_\_\_

$24+62=$  \_\_\_\_\_

$19+9=$  \_\_\_\_\_

$34+$  \_\_\_\_\_  $=57$

$45+29=$  \_\_\_\_\_

$53+$  \_\_\_\_\_  $=71$

Name \_\_\_\_\_

Date \_\_\_\_\_

## Addition Mystery Picture

1	2	3	4	5	6	7	8	9	10
11	12	13	14	15	16	17	18	19	20
21	22	23	24	25	26	27	28	29	30
31	32	33	34	35	36	37	38	39	40
41	42	43	44	45	46	47	48	49	50
51	52	53	54	55	56	67	58	59	60
61	62	63	64	65	66	67	68	69	70
71	72	73	74	75	76	77	78	79	80
81	82	83	84	85	86	87	88	89	90
91	92	93	94	95	96	97	98	99	100


# My READING


Date: \_\_\_\_\_

# HOMework MENU

**Directions:** choose an activity from the menu. Once you complete the activity, color in the box and attach the work to the back of the packet. Mrs. Balinbin would love to see your work!

**Challenge:** can you get 3 in a row (a tic-tac-toe or BINGO) with your activities this week?



<p>Read a story of your choice. Choose a rating for the book on a scale from 1-5 stars. <b>Explain</b> why you chose that rating.</p>	<p>Read a book in a silly place such as under a table or in a closet. Write where you read and how you felt reading there!</p>	<p>Write a story using as many spelling words as you can. Underline each of your spelling words.</p> <p>Bonus: Draw a picture to match your story!</p>
<p>Organize your spelling words by long a and long e spellings:</p> <p>Long a: ai, ay, ea Long e: ea, ee, ie, e</p>	<p><b>EVERY DAY:</b></p>  <p>Read 20 minutes</p>	<p>Read a story of your choice. List all of the literary elements from your story: <i>characters, setting, plot, events.</i></p>
<p>Write 4 simple sentences. <b>Then</b>, add see if you can combine them to create a compound sentence!</p> <p>The dog is hungry. The cat is thirsty. → The dog is hungry and the cat is thirsty.</p>	<p><b>Inference Game</b></p> <p>Describe something using 3 clues. See if a family member can guess what it is based on your clues!</p> <p>-</p>	<p>Read a story. Complete the Fiction Reading Response (page attached).</p>

Name \_\_\_\_\_

## Fiction Reading Response

Title

Author

What happened in your story? Write a summary.

---

---

---

---

---

---

---

---

---

---

What do you think about the story? Write your opinion.

---

---

---

---

---

---

---

---

What was your favorite part of the story? Draw it.

